

MULTIPLE CHOICE QUESTION EXAMINATION – OCTOBER , 2023

Class V Name: _____ Sec -__ Roll no- _____ Marks: 80

1) Give one word.

A person who talks a lot - _____.

A) Chatterer B) barber C) painter D) artist .

2) Look fixedly with eyes wide open - _____.

A) Talkative B) aired C)stare D) hear .

3) How many brothers did the Barber have ?

A) Seven B) six C) eight D) two .

4)To write an e mail , _____ is mandatory .

A) calculator B) table C) internet D) telephone .

5) A person who spends a lot of time in reading books is called _____ .

A) studious B) talkative C) generous D) lazy .

6) Prefix means to put a letter or letters _____ the given word .

A) before B) after C) between D) under .

7) The opposite of expected is _____.

A) imexpected B) disexpected C) unexpected D) expectedly.

8) Meetu lends her book to her friend .So she is _____.

A) brave B) naughty C) generous D) hardworking .

9) Another word for exhausted is _____.

A) worried B) fresh C) tired D) alert .

10) My sister took care of the dog _____ I was away .

A) while B)so C) until D) then

11) Mural means a _____.

A) a portrait B) drawing on a canvas C) a wall picture D)autograph.

12) Be quick and finish your work .Who said these words?

A) The Barber B) The Sultan C) The teacher D) The minister .

13) If lunch is the meal taken in the afternoon then dessert is the sweet dish taken _____ the main course .

A) before B) after C) between D) never .

14) We went to a fair _____ we saw a merry go round .

A) where B) or C) till D) which .

15) Tick the correct spelling .

A) exhusted B) exhausted C) exahaysted D) exxhauuted .

16) Who was very quiet in the poem 'Class Discussion'?

A) Shawn B) Anna C) Jane D) Dan .

17) What you _____ in others , take care to correct in yourself .

A) unable B) dislike C) impatient D) impossible .

18) When I am at a cricket match , I _____.

A) sing and serve B) ride and dance C) serve and teach D) cheer and wave.

19) The bravery award is given to brave children of India on _____.

A) Independence day B) Republic day C) Teachers' day D) Childrens' day .

20) Who has written the poem 'Class Discussion'?

A) H.E Wilkinson B) Gervase Phinn C) John Keats D) William Wordsworth .

21) सही शब्द पहचानो -

(A) फ़ौरन (B) फोरन (C) फ़ोरन (D) फोरान

22) खिदमत शब्द का अर्थ क्या है ?

(A) विनती (B) सेवा (C) बिल्कुल (D) बेबस

23) दादी नाश्ते में क्या पी रही थी ?

(A) बादाम का हरीरा (B) खीरे का सूप (C) गर्म पानी (D) संतरे का जूस

24) अब्बा से दफ्तर जाते समय कितने रुपये मांगे ?

(A) 500 (B) 1 (C) 100 (D) 5

25) आरिफ़ को नाश्ते में क्या क्या खाना पसंद था?

(A) दलिया (B) गाजर का हलवा (C) बिस्कुट (D) आलू

26) इकरार का विलोम शब्द क्या है ?

(A) जवाब (B) इनकार (C) अधिकार (D) हरीरा

27) आरिफ़ और सलीम घर के एक दिन के _____ बने ।

(A) बादशाह (B) नौकर (C) बच्चे (D) खानसामा

28) इनमें से तर माल कौन सा है ?

(A) हरीरा (B) सब्जी (C) रोटी (D) दाल

29) भारी अटैची में भारी शब्द का अर्थ क्या है ?

(A) बड़ी (B) वज़नदार (C) तेज़ (D) महंगी

30) आरंभ का विपरीत शब्द बताओ ।

(A) अंत (B) सब्र (C) इनकार (D) शुरू

31) प्रबंधक का अर्थ क्या होता है ?

(A) खाना बनाने वाला (B) इंतज़ाम करने वाला (C) धन्यवाद (D) भूखा

32) तश्करी शब्द का समान अर्थी शब्द क्या होगा ?

(A) प्लेट (B) खबर (C) रोटी (D) फूलदान

33) चावल की रोटियाँ पाठ में मुख्य पात्र कौन हैं ?

(A) लिन सू (B) नीनी (C) ऊ बा तुन (D) कोको

34) मुरमुरे को भूनकर क्या बनता है ?

(A) चिउड़ा (B) भात (C) चावल (D) दलिया

35) फूल का वचन बदलो ।

(A) फूलो (B) फूल (C) फूला (D) फूले

36) खुश शब्द का विलोम शब्द क्या होगा ?

(A) उदास (B) रोना (C) सोना (D) मुस्कान

37) मिमी किस चीज़ के पापड़ लाई थी ?

(A)आलू के (B)चावल के (C)केले के (D) साबूदाने के

38) कोको की उम्र कितनी थी ?

(A)आठ वर्ष (B)नौ वर्ष (C)दस वर्ष (D)बारह वर्ष

39)कोको के घर पर सबसे पहले कौन आया था ?

(A)मिमी (B)नीनी (C)तिन सू (D)ऊ बा तुन

40)ऊ बा तुन कौन था ?

(A)कोको का दोस्त (B)दुकान का प्रबंधक (C)कोको का पिता (D)मिमी का पिता

41. A hexagon has_____sides.

A. 5 B. 6 C. 7 D. 8

42. The river flowing near the Red Fort is_____river.

A. Ganga B. Saraswati C. Yamuna D. Narmada

43. The king used to meet the common people here

A. Naqqar khana B. Rang Mahal C. Diwan-e-Aam
D. Diwan-e-Khaas

44.Ninu lives in Gujarat. He wants to visit his friend in West Bengal. Ninuwill travel in
_direction.

A. West B. North C. East D. South

45. Which state has sea on one side?

A. Punjab B. Orissa C. Bihar D. Madhya Pradesh

46. _____ colour is used to show the sea on the map.

A. Red B. Green C. Blue D. Yellow

47. All the faces of a cube are_____in shape.

A. Triangle B. Rectangle C. Square D. Pentagon

48. A cube has_____edges.A. 6 B. 8 C.

12 D. 5

49. The number of faces in an open box is_____.A. 5 B. 6 C.

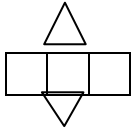
A. 5 B. 6 C.7 D. 8

50. The sum of the numbers on the opposite faces of a die is equal to

_____.

- A. 6 B. 7 C. 8 D. 9

51



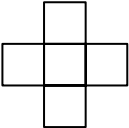
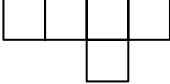
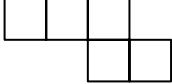

It can be folded into

- A)  B)  C)  D) 

52. Bangalore is located to the _____ of Delhi.

- A. East B. West C. North D. South

53. Which one of the given shapes cannot be folded to make an open box?

- A.  B.  C.  D. 

54 If 200 km on the ground is shown by 1 cm on the map, then 800 km will be shown by _____ cm on the map.

- A. 2 B. 3 C. 4 D. 5

55)  It can be folded into a_.

- B. Cone B. Cylinder C. Cube D. Cuboid

56) A matchbox is an example of a_____.

- C. Cylinder B. Cube C. Cuboid D. Cone

57) Which 3-dimensional object has no edge.

- D. Cyclinder B. Cube C. Cone D. Sphere

58) A special way of drawing the house which is deep to show the length, width and height is called a_____.

- E. Floor map B. Deep drawing C. Painting D. Model

59) The scale of map is 1 cm = 100 km. The distance from Chennai to Delhi in the map is 25 cm. What is the actual distance?

- A. 250 km B. 25 km C. 2500 km D. 25000 km

60) Which state is surrounded by 5 other states?

- F. Kerala B. Orissa C. Bihar D. Madhya Pradesh

Q.61 Which calamity occurred on 26th January, 2001?

A. Cyclone B. Flood C. Earthquake D. Tsunami

Q.62 When there is no rain, crops can fail; then there can be

A. Cyclone B. Flood C. Famine D. Drought

Q.63 Excessive rainfall can lead to

A. Cyclone B. Flood C. Earthquake D. Drought

Q.64 Shortage of food and water can result in a

A. Famine B. Flood C. Earthquake D. Tsunami

Q.65 Which of the following place is a 'cold desert' ?

A. Manali B. Ladakh C. Mount Abu D. Jammu

Q.66 Where is Leh?

A. Changthang B. Ladakh C. Srinagar D. Manali

Q.67 The carving on the ceiling of houseboat in Srinagar is called

A. Motif B. Khatamband C. Mehraab D. Panel

Q.68 Some old houses in Srinagar have a special window which comes out of the wall known as

A. Lekha B. Donga C. Dab D. Mehraab

Q.69 Which of the following is not a type of house?

A. Dab B. Donga C. Houseboat D. Rebo

Q.70 Bakarwal people live in houses made of

A. mud and lime B. stones and mud C. bamboos D. mud and hay

Q.71 In which direction does one have to travel while going from Mumbai to Leh?

A. North B. South C. East D. West

Q.72 Which of the following fuels gives least smoke?

A. Petrol B. CNG C. Diesel D. None of these

Q.73 It is difficult to breathe at high places. Why?

A. The body stops working properly at such heights

B. Air is thin and at low pressure

C. Due to cold, air freezes

D. Nose has to work harder to breathe in air

Q.74 To clean oil found deep down in the earth, it is sent to

A. Pumps B. Flood C. Refinery D. Mills

Q.75 Which of the following is obtained from petroleum?

- A. Wax B. LPG C. Petrol D. All of these

Q.76 Which gas is used for cooking in homes?

- A. CNG B. LPG C. Both (A) and (B) D. None
of these

Q.77 Which of these is a renewable source of energy?

- A. Solar B. Kerosene C. Petrol D. Natural Gas

Q.78 Which mode of transport does not cause pollution?

- A. Train B. Bus C. Motor cycle D. Cycle

Q.79 Which mode of transport can reduce congestion on road?

- A. Car B. Auto C. Bus D. Scooter

Q.80 How many people in our country use uple, wood and dry twigs to cook food?

- A. Half of the people B. One fourth of the people C. Two third of the
people D. All the people

D.

